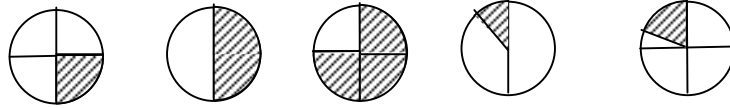
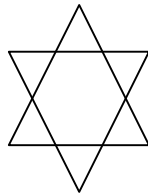


CLASS – III
Maths Quiz

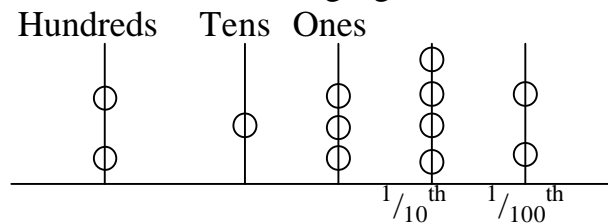
1. Arrange the following in ascending order:



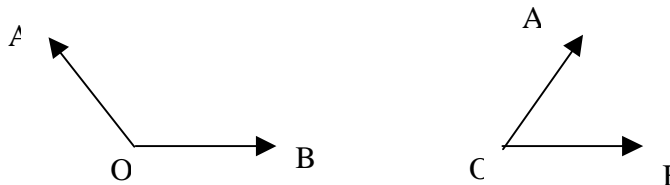
2. A washerman put out 5 sarees on a clothesline to dry. If 5 sarees took 20 minutes to dry, how long will it take for 10 sarees to dry ?
3. You were asked to buy 2 litres of milk. How many times will the milkman use a half litre measure to give you 2 litres of milk ?
4. Count the number of triangles in the following figure.



5. The human body consists of $\frac{3}{4}$ ths water. How much water will be there is a person weighing 100 kg ?
6. A train departs at 16:45 hrs from Howrah station. What time of the day does it actually depart at ?
7. A person bought a gift item for 225 Rs. And sold it for 200 Rs.. What is the profit he made on the same ?
8. A child has got 80 marks out of 100 in a particular test. What percentage does this work out to be ?
9. What number does the following figure show ?



10. How many squares does a chess board have?
11. Draw a square and measure the length of all the sides.
12. Are both this figures the same? If not why?



13. The cost of a saree was Rs. 1000. A retailer bought 100 such sarees. How much did he pay in all ?
14. Your class has 40 students. You have 200 pencils. How will you divide it equally ?
15. How is a coin different from a marble ?
16. What is the sum of the numbers from 1 to 10 ?
17. What is the difference between the largest four digit number and the smallest four digit number ?
18. a car needs 2 and a half cans of paint. How many cans will 10 cars need ?
19. How many 75 paises make 6 Rs.?
20. The time in India now is 6 p.m. If America is 12 hrs. behind us what time will it be there at that time ?